

Subject: NVR

Maximum Marks: 40

Time: 40 min

Class: Pre-Cambridge

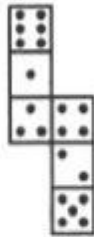
ANSWER ALL QUESTIONS ON THE ANSWER SHEET PROVIDED.

- Do not write on the Question Paper.
- Note: Each question carries 02mark.

Q 1.

How many dots lie opposite to the face having three dots,

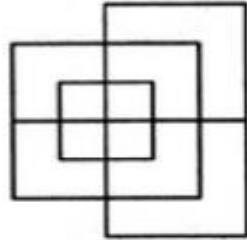
when the given figure is folded to form a cube?



- A. 2
- B. 4
- C. 5
- D. 6

Q.2

Find the minimum number of straight lines required to make the given figure.



A. 13

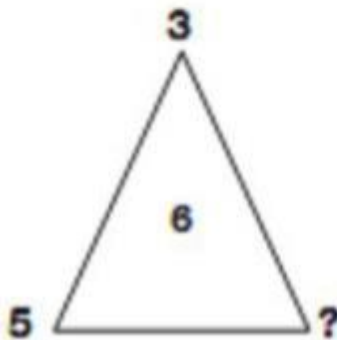
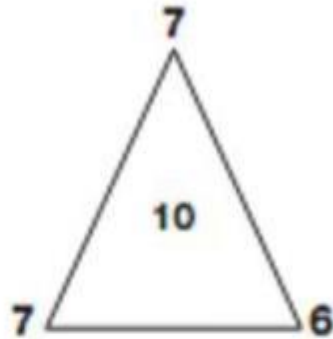
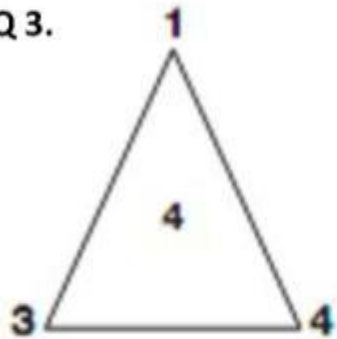
B. 15

C. 17

D. 19

Which number replaces the question mark?

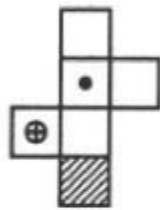
Q 3.



- A. 3
- B. 4
- C. 5
- D. 6

Q 4.

Choose the box that is similar to the box formed from the given sheet of paper (X).



(X)



(1)



(2)



(3)

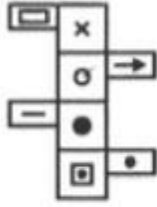


(4)

- A. 1 only
- B. 1 and 3 only
- C. 1, 3 and 4 only
- D. 1, 2, 3 and 4

Q 5.

Choose the box that is similar to the box formed from the given sheet of paper (X).



(X)



(1)



(2)



(3)

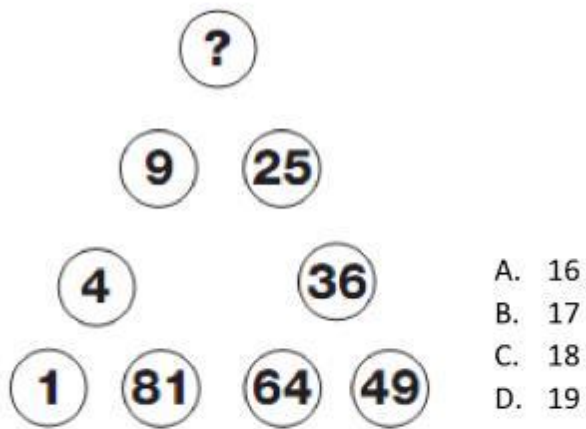


(4)

- A. 1 and 2 only
- B. 1 and 3 only
- C. 3 and 4 only
- D. 1, 2, 3 and 4

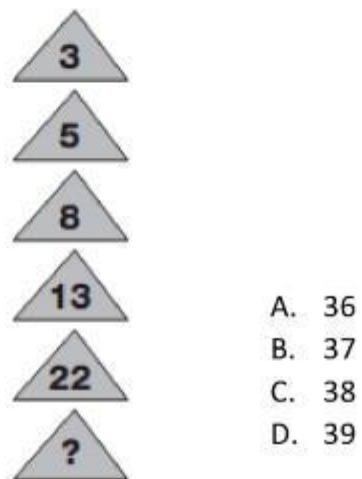
Q.8.

Which number replaces the question mark?




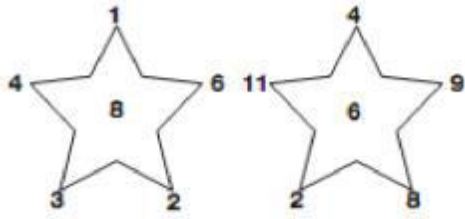
Q.9.

Which number replaces the question mark?



Q.6.

Which number replaces the question mark?



A. 5


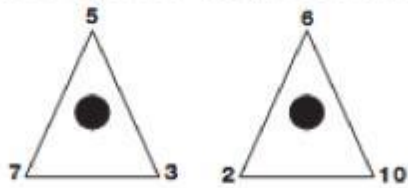
B. 6

C. 7

D. 8

Q.7.

Which number replaces the question mark?



A. 4

B. 5

C. 6

D. 7

Q.10.

Which number replaces the question mark?

7	3	6	2
2	8	5	4
1	1	2	4
4	2	1	?

- A. 4
- B. 5
- C. 6
- D. 7

Q.11.

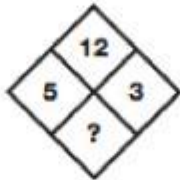
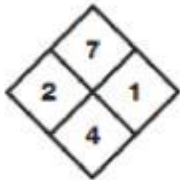
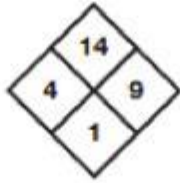
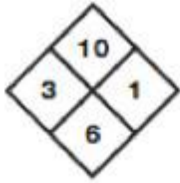
Which number replaces the question mark?



- A. 21
- B. 22
- C. 23
- D. 24

Q.12.

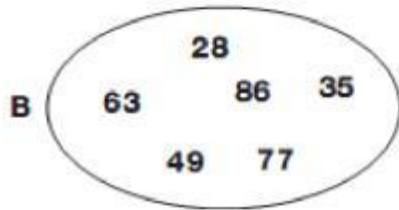
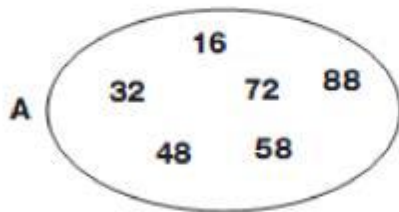
Which number replaces the question mark?



- A. 2
- B. 3
- C. 4
- D. 5

Q.13.

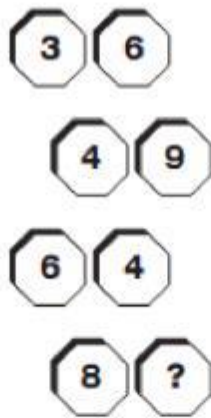
Which number is the odd one out in each oval?



- A. A: 72 B: 28
- B. A: 16 B: 49
- C. A: 58 B: 35
- D. A: 58 B: 86

Q.14.

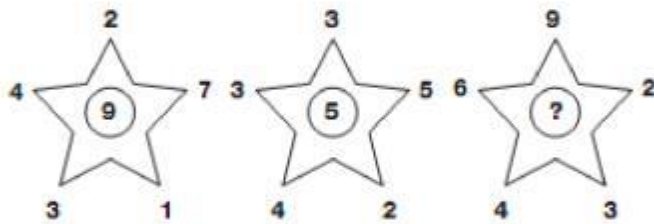
Which number replaces the question mark?



- A. 0
- B. 1
- C. 2
- D. 3

Q.15.

Which number replaces the question mark?



- A. 10
- B. 11
- C. 12
- D. 13

Q.16. What has hands, but can't clap?

- A. Coat
- B. Clock
- C. Kettle
- D. Cup

Q .17. What has one eye, but can't see?

- A. A Minions
- B. A Scissors
- C. A Reel
- D. A Needle

Q .18. What has words, but never speaks

- A. A Poster
- B. A Book
- C. A Billboard
- D. A Map

Q .19. What can you catch, but not throw?

- A. A Basket ball
- B. A Football
- C. A Cold
- D. A Tennis Ball

Q .20. What has legs, but doesn't walk?

- A. A Table
- B. A Chair
- C. A Trolley
- D. A Stool